

# Lead2passExam

> Contact Us    Login / Register    Search...

Lead2passExam

HOME

ALL VENDORS

★ GUARANTEE

? FAQ

TESTIMONIALS

CART (1)

## Pass Your Next Certification Exam Fast!

Everything you need to prepare, learn & pass your certification exam easily.  
365 days free updates. First attempt guaranteed success.



Select a vendor...

Select an test...

Your email address

Free Download Demo

### Top Certifications

- ▶ IBM Cognos   ▶ Linux Essentials   ▶ Magento Certified Developer Plus   ▶ BCS Certification
- ▶ Citrix NetScaler   ▶ Nokia Networks Certification   ▶ Solutions Expert
- ▶ VCAP6-DCV Deployment   ▶ Oracle Sales Cloud 2016 Certified   ▶ Oracle Service Cloud
- ▶ CCP-N   ▶ IBM Certified Mobile System Administrator   ▶ Windows 7   ▶ APC Certification
- ▶ HPE Sales Certified

### Top Vendors

- ▶ Logical Operations   ▶ TIA   ▶ Pegasystems   ▶ IISFA   ▶ Mile2   ▶ 3COM   ▶ Altiris   ▶ IIA
- ▶ AccessData   ▶ Avaya   ▶ BACB   ▶ Nokia   ▶ RAPS   ▶ McAfee   ▶ Professional Tests
- ▶ Mile2-Security   ▶ CIPS   ▶ Legato   ▶ ASQ   ▶ QlikView   ▶ NSCA   ▶ PSAT   ▶ HRCI
- ▶ WorldatWork   ▶ Guidance Software

### What Client's Say

“ Passed the exam yesterday, but 10 questions new not came from this dump. every other questions are same. Totally valid. ”



Roy  
★★★★★

“ This is still valid. Passed today with 80%. looked like 3-4 new questions. Many thanks! Good braindumps ”



Vic  
★★★★★

<http://www.lead2passexam.com/>

Available Exam Cram and Valid Dumps - Lead2Pass Exam





## Generator Gasoline Consumption



How many gallons of gas were in the generator's gasoline tank before the generator was turned on?

**Answer:**

10

### QUESTION NO: 3

Avery charges a fixed amount for a house call plus an hourly fee of \$12.50 for repairing televisions. His bill for repairing a television in a customer's home was \$62.00.

If Avery worked 4 hours, what was the fixed amount he charged for the house call?

- A. \$ 6.00
- B. \$12.00
- C. \$16.50
- D. \$49.50
- E. \$50.00

**Answer:** B

### QUESTION NO: 4

Exhibit.

**Results of Charity Fundraisers**

Source of Money Raised	Amount of Money Raised
Candy bar sales	\$180
Donations	\$260
Dance tickets	\$450
Car wash	\$186
Bake sale	\$204

The members sold 120 candy bars. Each candy bar was sold for the same price. What was the charge for one candy bar?

- A. \$1.00
- B. \$1.20
- C. \$1.50
- D. \$2.00
- E. \$2.50

**Answer:** C

**QUESTION NO: 5**

Exhibit.

**Results of Charity Fundraisers**

Source of Money Raised	Amount of Money Raised
Candy bar sales	\$180
Donations	\$260
Dance tickets	\$450
Car wash	\$186
Bake sale	\$204

What percent of its goal did the organization achieve?

- A. 64%
- B. 71%
- C. 76%
- D. 79%
- E. 82%

**Answer:** A

**QUESTION NO: 6**

Using any area code followed by a 7-digit number, 107, or 10,000,000, telephone numbers are possible. Originally, 800 was the only toll-free area code.

If two additional toll-free area codes were made available, how many MORE toll-free telephone numbers would be possible?

- A. 107
- B.  $2 \times 107$
- C.  $3 \times 107$
- D.  $2 \times 10^{14}$
- E.  $3 \times 10^{14}$

**Answer:** B

**QUESTION NO: 7**

Exhibit.

**Amount per \$1.00 Invested, Compounded Continuously**

Annual Rate	Length of Time		
	1 year	2 years	4 years
6.25%	1.0645	1.1331	1.2840
6.50%	1.0672	1.1388	1.2969
6.75%	1.0698	1.1445	1.3099

If the interest is compounded continuously, which of the following is the best estimate of the worth of each \$1.00 invested for 3 years at 6.75%?

- A. 1.0725
- B. 1.1801
- C. 1.1841
- D. 1.2245
- E. 1.3231

**Answer:** D

**QUESTION NO: 8**

To meet quality control requirements, inspectors examine every 37th item coming off a factory assembly line.

How many of the first 500 items coming off the assembly line must be inspected?

- A. 12
- B. 13
- C. 14
- D. 15
- E. 16

**Answer:** B

**QUESTION NO: 9**

Exhibit.

## Election Results

Candidate	Percent of Votes
Viaman	52.1%
Ramirez	36.4%
Watson	11.3%
Jones	0.2%

How many MORE votes did Viaman receive than the other three candidates combined?

- A. 4
- B. 48
- C. 52
- D. 400
- E. Not enough information is given.

**Answer:** E

### QUESTION NO: 10

The ratio of trucks to cars sold at Marathon Motors during the year is about 2 to 5. If the company sold about 500 cars last year, about how many trucks did it sell?

- A. 200
- B. 250
- C. 300
- D. 500
- E. 700

**Answer:** A

### QUESTION NO: 11

Of the first 80 customers entering a store, 35% purchased at least one item. How many of the first 80 customers purchased at least one item?

- A. 20
- B. 28
- C. 30
- D. 35
- E. 52

**Answer:** B

**QUESTION NO: 12**

Tara earns \$460 for working 40 hours a week. This week she also earned \$69 in overtime pay and a bonus of \$75 for meeting her weekly production quota. Withheld from her pay were \$86 for taxes and \$18 for insurance.

Which of the following expressions represents the number of dollars Tara received in her paycheck this week?

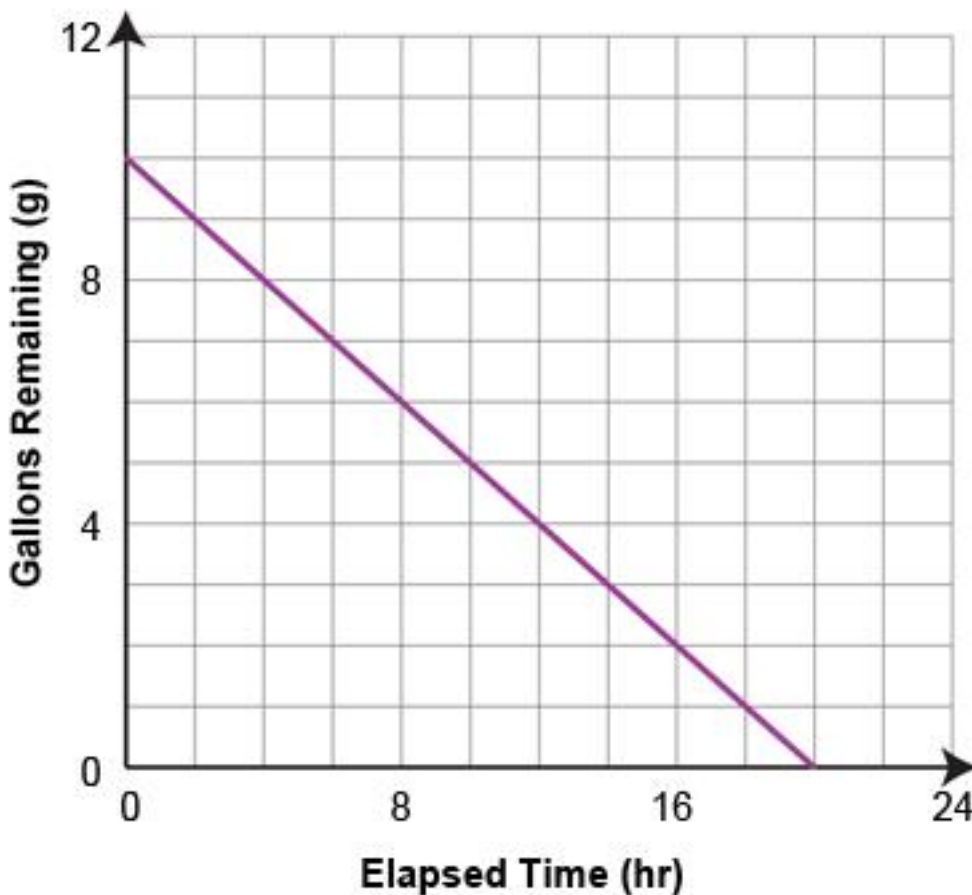
- A.  $69 + 75 - (86 + 18)$
- B.  $460 + 69 + 75 + 86 + 18$
- C.  $460 - (69 + 75) - (86 + 18)$
- D.  $460 + 69 + 75 - (86 - 18)$
- E.  $460 + 69 + 75 - (86 + 18)$

**Answer:** E

**QUESTION NO: 13**

Exhibit.

### Generator Gasoline Consumption



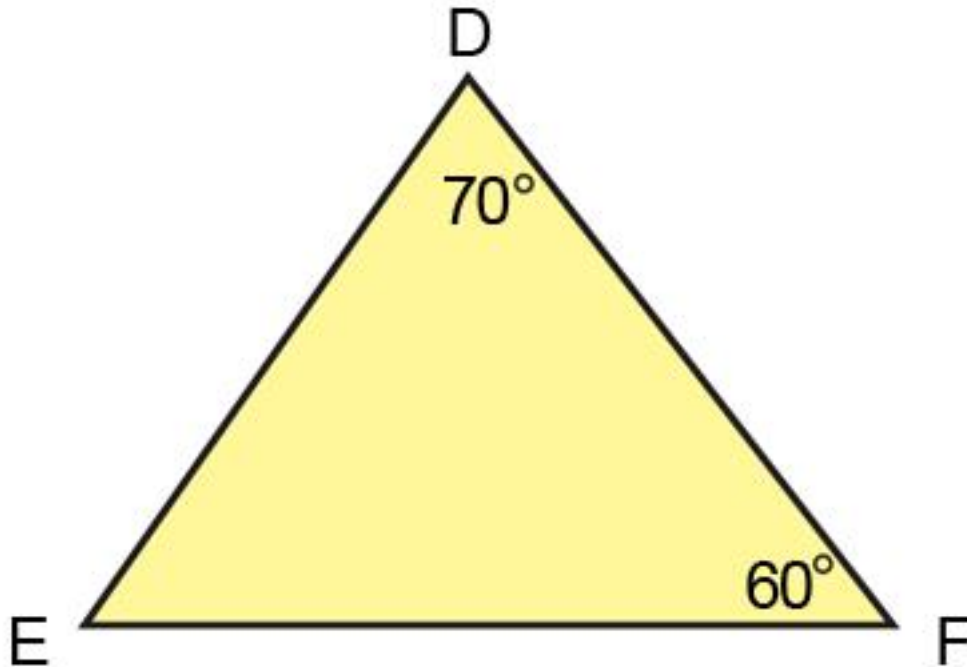
At what rate, in gallons per hour, is the gasoline being used by the generator?

**Answer:**

gallonsperhour

**QUESTION NO: 14**

Exhibit.



What is the measure of angle E?

- A.  $70^\circ$
- B.  $65^\circ$
- C.  $60^\circ$
- D.  $50^\circ$
- E. Not enough information is given.

**Answer:** D

**QUESTION NO: 15**

Boxes for shipping telephones can contain a maximum of 18 phones. What is the FEWEST number of boxes needed to ship an order for 110 phones?

- A. 6
- B. 7
- C. 8
- D. 9
- E. 10

**Answer:** B

**QUESTION NO: 16**

On Saturday mornings, Rosa exercises by riding her bicycle along a route from her home and back again. Her ride normally takes 1 hour and 40 minutes to complete.

If Rosa leaves home at 10:30 A.M. and rides for the usual amount of time, when will she



gardening gloves she also purchased.

If Moria spent a total of \$10.80, how much did she spend for the gardening gloves?

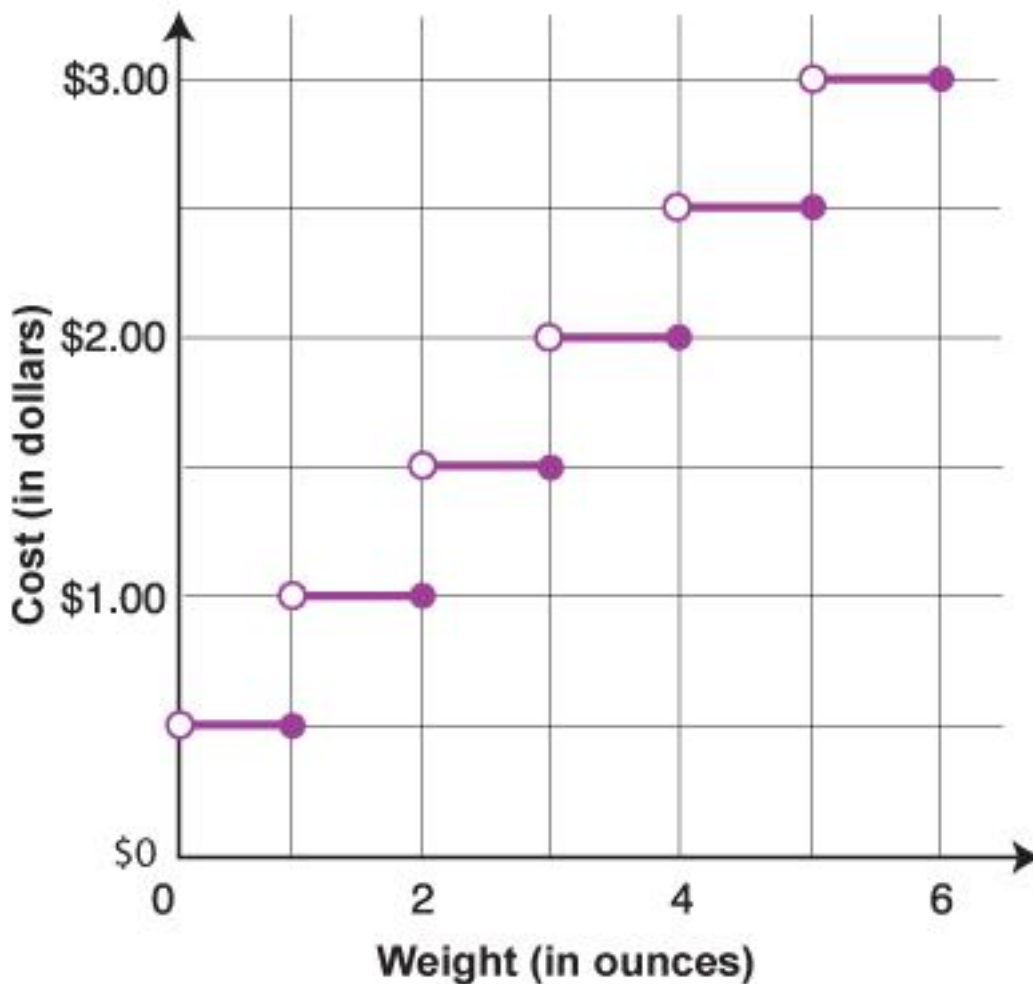
- A. \$8.10
- B. \$8.01
- C. \$4.53
- D. \$2.70
- E. \$2.60

**Answer:** D

**QUESTION NO: 21**

Exhibit.

### Overseas Letter Postage Costs



According to the graph, how much MORE does it cost to mail an overseas letter weighing 4.1 ounces than a letter weighing 3.5 ounces?

- A. \$0.50
- B. \$0.60
- C. \$1.50
- D. \$2.00

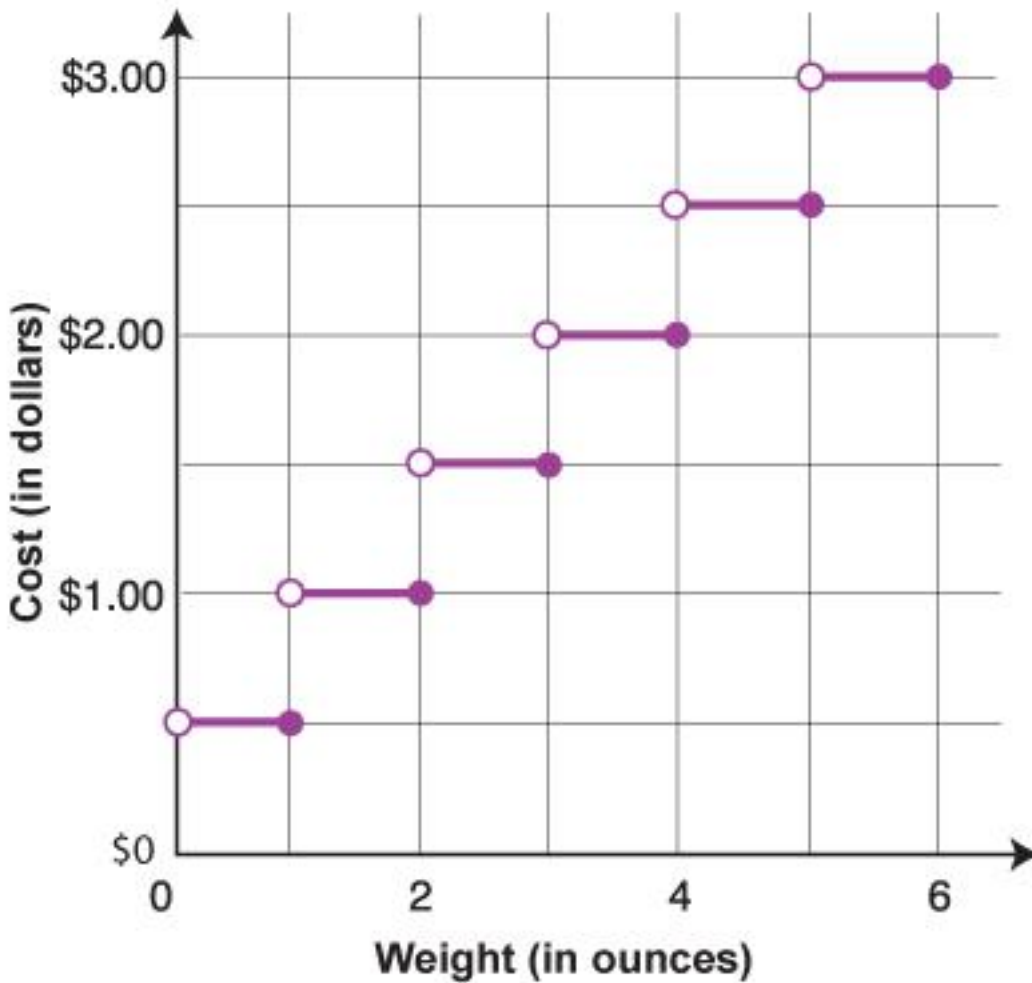
E. \$2.50

**Answer:** A

**QUESTION NO: 22**

Exhibit.

### Overseas Letter Postage Costs



If the postage on an overseas letter costs \$1.50, which of the following could be the weight of the letter in ounces?

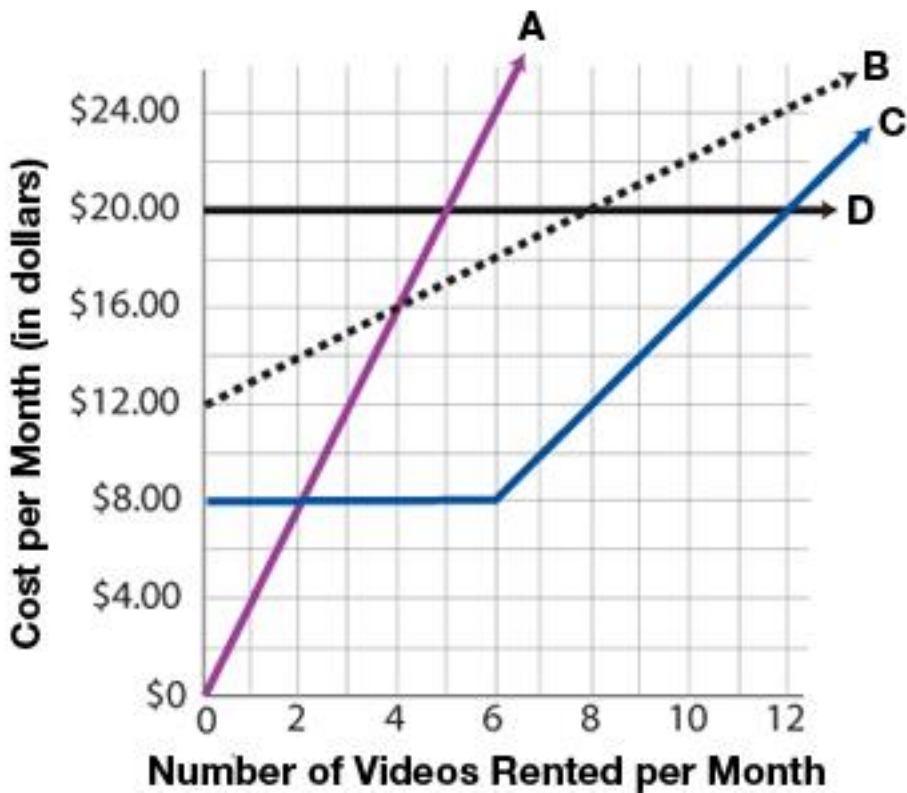
- A. 1.5
- B. 2.2
- C. 3.4
- D. 3.8
- E. 4.1

**Answer:** B

**QUESTION NO: 23**

Exhibit.

## Video Land's Monthly Rental Plans



For how many videos rented per month is the cost with Plan A the same as the cost with Plan B?

- A. 12
- B. 5
- C. 4
- D. 2
- E. Not enough information is given.

**Answer:** C

### QUESTION NO: 24

Exhibit.

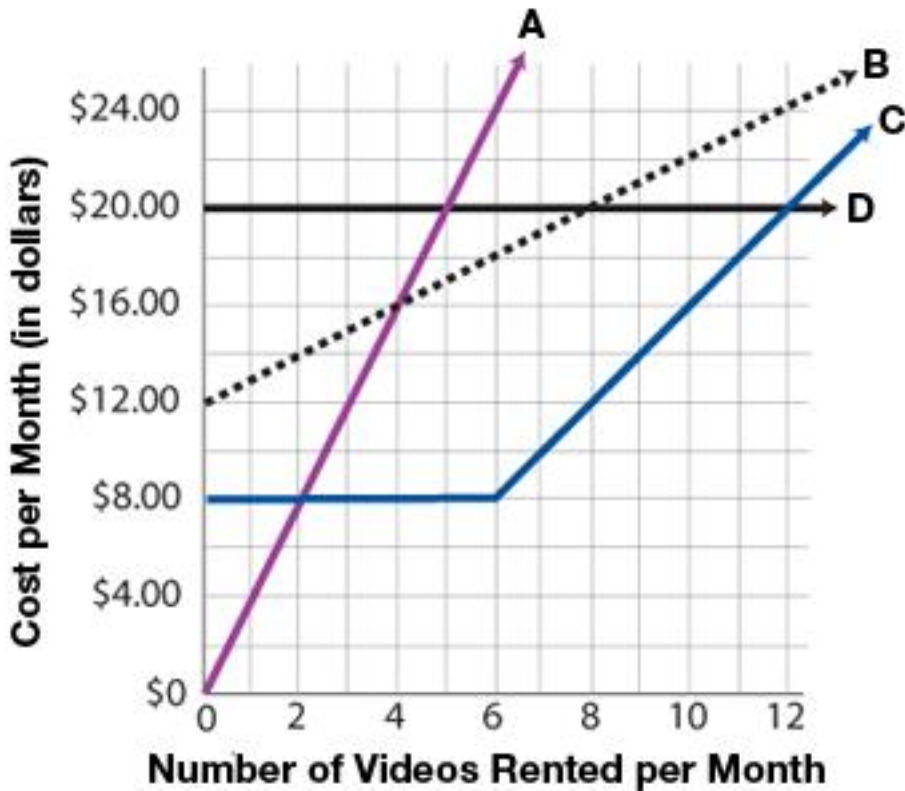


**Answer:** D

**QUESTION NO: 26**

Exhibit.

**Video Land's Monthly Rental Plans**



How much MORE would it cost to rent 6 videos per month under Plan D than to rent 6 videos per month under Plan C?

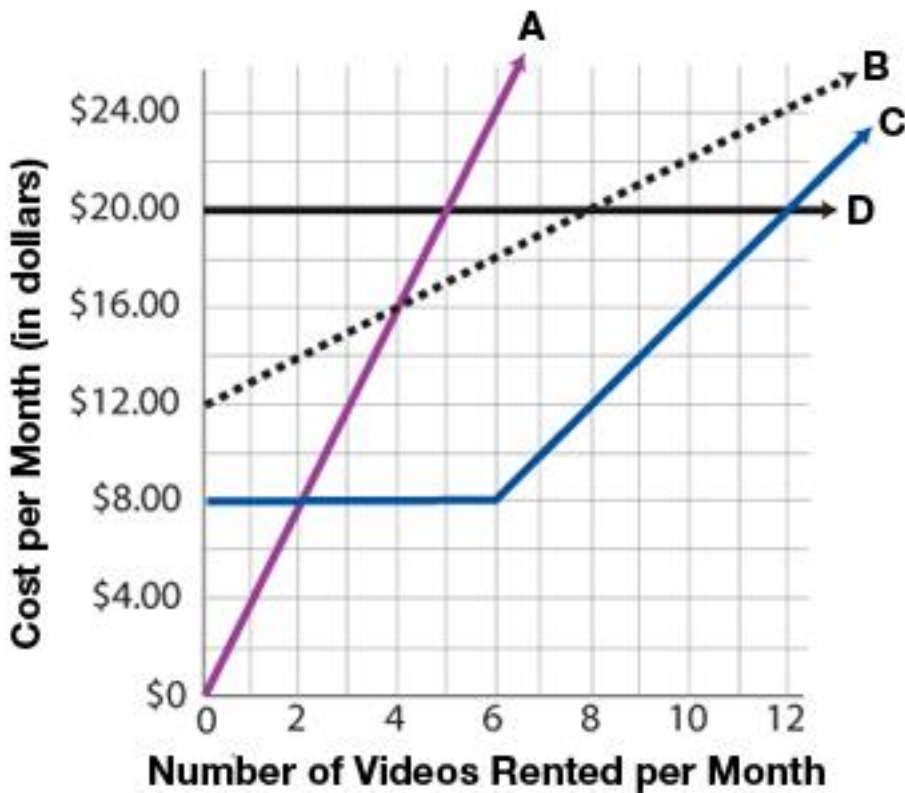
- A. \$ 8
- B. \$10
- C. \$12
- D. \$16
- E. \$20

**Answer:** C

**QUESTION NO: 27**

Exhibit.

## Video Land's Monthly Rental Plans



If the patterns continue as shown in the graph, under which plan would a family spend the LEAST to rent 15 videos per month?

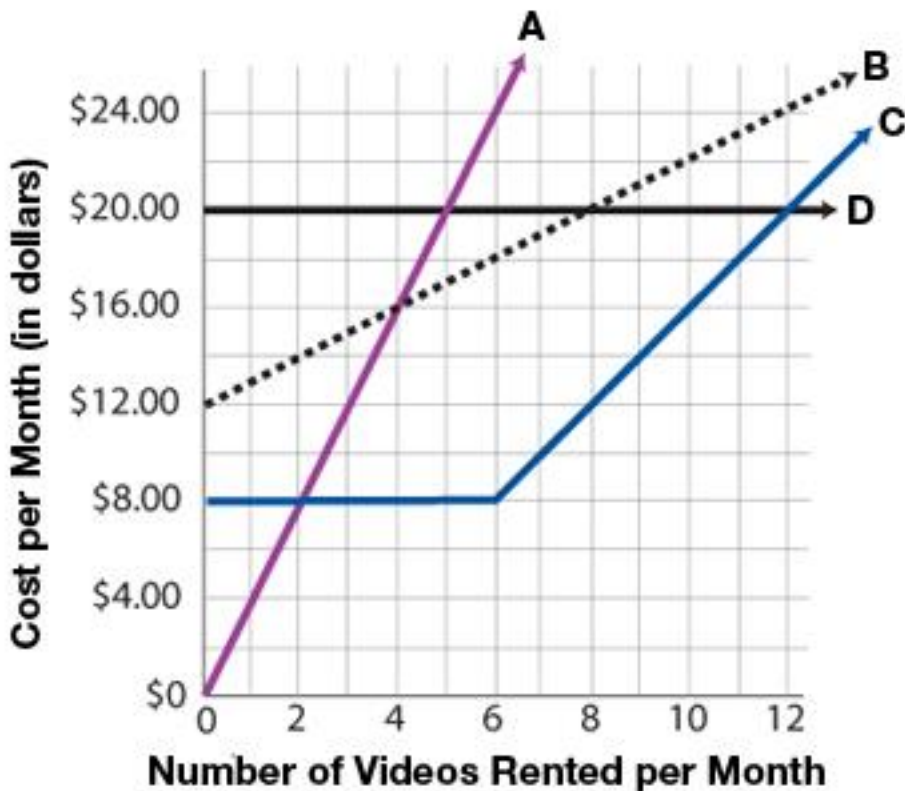
- A. A
- B. B
- C. C
- D. D
- E. Not enough information is given.

**Answer:** D

### QUESTION NO: 28

Exhibit.

## Video Land's Monthly Rental Plans



What is the cost, in dollars, to rent each video under Plan A?

**Answer:**

dollars

### QUESTION NO: 29

To be eligible to vote in the town of Clayton, a person must be a resident of the town and at least 18 years of age. Of the town's 5000 residents, 3000 are at least 18 years old. Of these, 2700 have registered to vote.

A pool of 35 Clayton jurors is to be randomly selected next month from the town's registered voters. Ahmad is a registered voter who lives in Clayton.

What is the probability Ahmad will be among those selected for the jury pool next month?

A.

$$\frac{35}{5000}$$

B.

$$\frac{35}{3000}$$

C.

$$\frac{35}{2700}$$

D.

$$\frac{35}{2300}$$

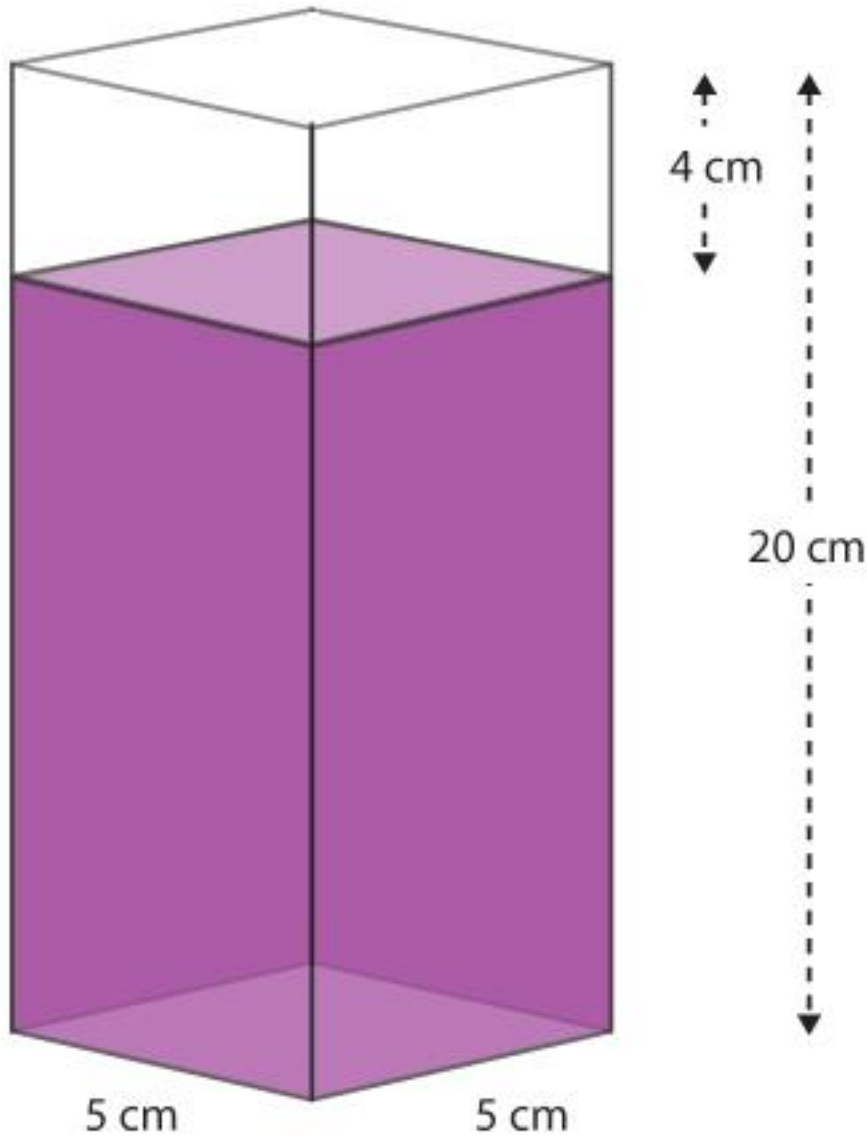
E.

35  
2000

**Answer: C**

**QUESTION NO: 30**

Exhibit.



When the contents have settled and the package is opened, the height of the empty space measures 4 centimeters.

What portion of the volume of the package is filled with the SETTLED contents?

- A.  $\frac{1}{20}$
- B.  $\frac{1}{5}$
- C.

